

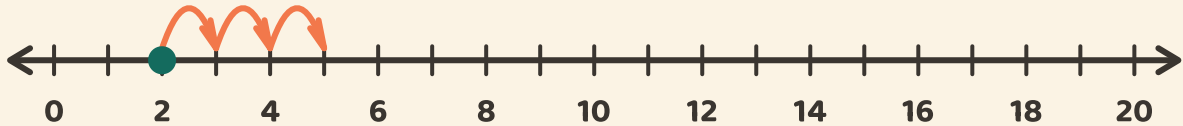
Salte pela reta

Nome: _____ Data: _____



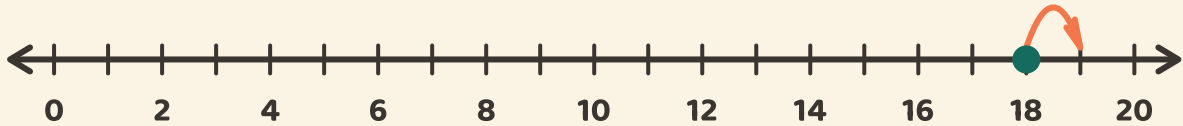
Comece no ponto. Conte os saltos. Escreva a resposta da adição.

1



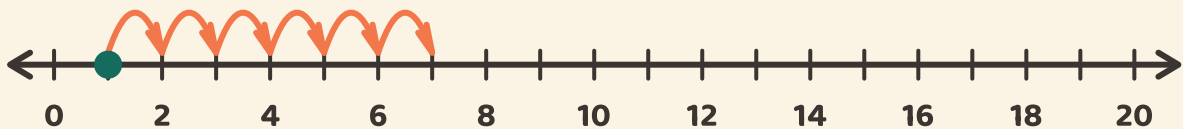
$$2 + 3 = \boxed{}$$

2



$$18 + 1 = \boxed{}$$

3



$$1 + 6 = \boxed{}$$