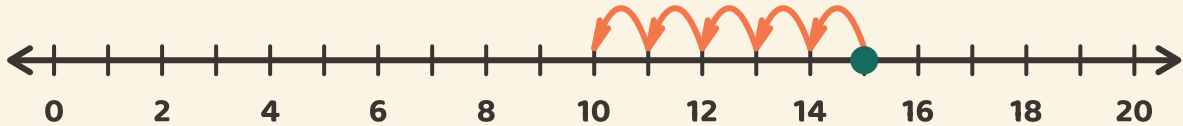


Salte de volta e subtraia

Nome: _____ Data: _____

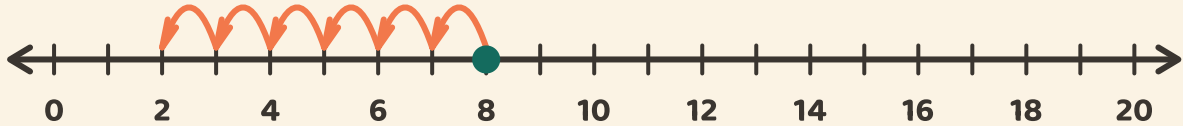
★ Siga os saltos para trás. Escreva a resposta da subtração.

1



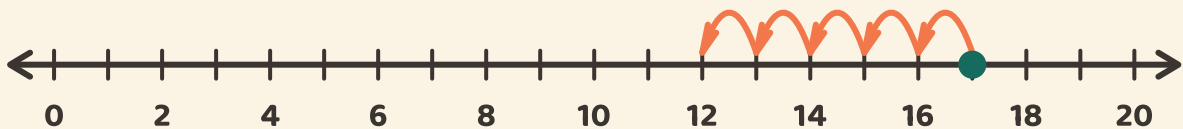
$$15 - 5 = \boxed{}$$

2



$$8 - 6 = \boxed{}$$

3



$$17 - 5 = \boxed{}$$