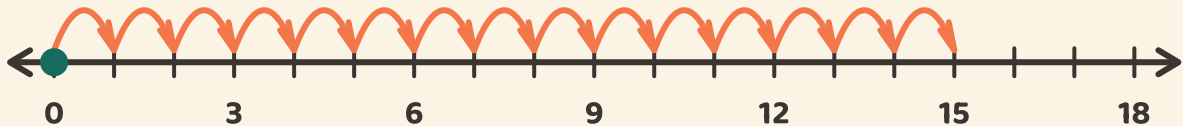


Saltos de multiplicação

Nome: _____ Data: _____

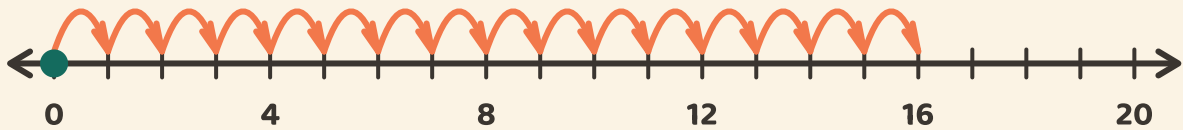
★ Siga os saltos iguais desde o zero. Escreva cada número de chegada.

1



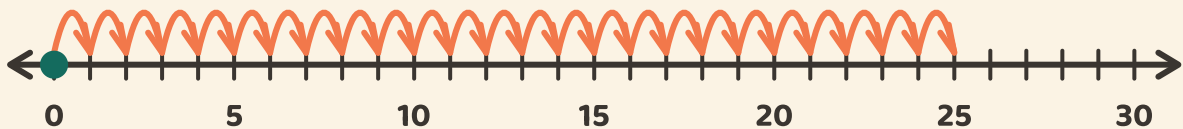
□, □, □, □, □

2



□, □, □, □

3



□, □, □, □, □