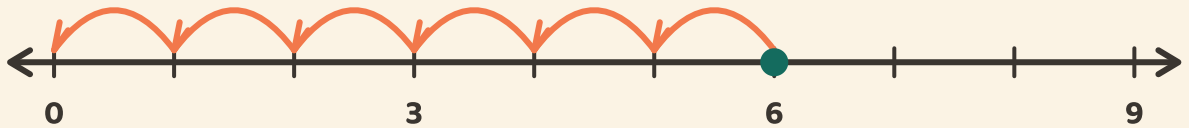


Salte até o zero

Nome: _____ Data: _____

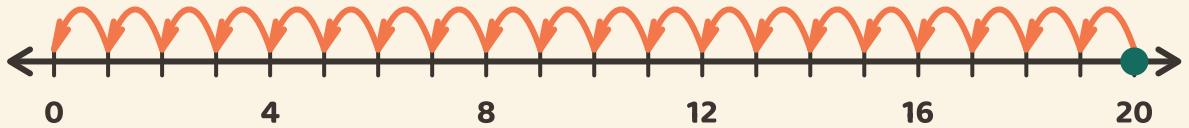
★ Conte os saltos iguais de volta ao zero. Escreva quantos saltos leva.

1



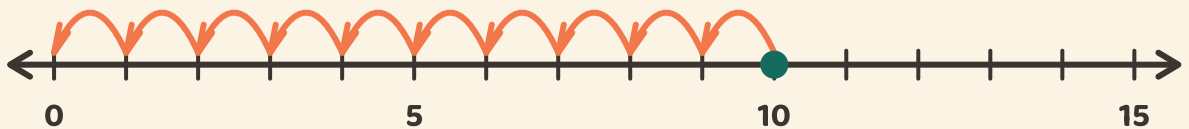
$$6 \div 3 = \square$$

2



$$20 \div 4 = \square$$

3



$$10 \div 5 = \square$$