


# Quantas dezenas?

Nome: \_\_\_\_\_ Data: \_\_\_\_\_


★ Conte as barras de dez. Complete a sentença numérica.

1



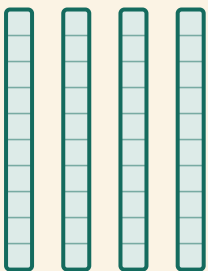
$$\square \times 10 = \square$$

2




$$\square \times 10 = \square$$

3



$$\square \times 10 = \square$$

4



$$\square \times 10 = \square$$