


Forme uma dezena

Nome: _____ Data: _____


 Circule 10 unidades para formar uma dezena. Escreva quantas dezenas e unidades.

1




$$\square \times 10 + \square$$

2



$$\square \times 10 + \square$$

3



$$\square \times 10 + \square$$

4



$$\square \times 10 + \square$$