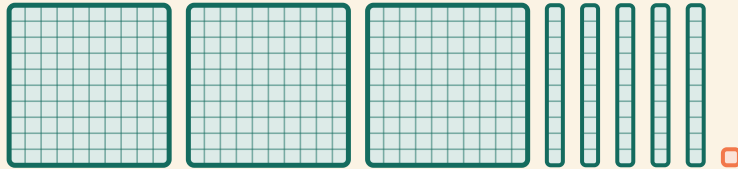


Centenas, dezenas, unidades

Nome: _____ Data: _____

★ Olhe os blocos. Circule a forma decomposta certa.

1




$30 + 50 + 1$

$300 + 50 + 1$

$300 + 10 + 5$

2

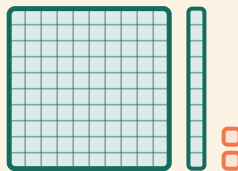


$500 + 40 + 2$

$50 + 40 + 2$

$500 + 20 + 4$

3



$100 + 10 + 2$

$100 + 20 + 1$

$10 + 10 + 2$