





# Rolig Addition

Addera talen och skriv dina svar!

1.  +   $3 + 3 = 6$

2.  +   $3 + 1 = 4$

3.  +   $4 + 4 = 8$

4.  +   $3 + 2 = 5$

5.  +   $5 + 1 = 6$

6.  +   $2 + 2 = 4$