




# Rolig Addition


Addera talen och skriv dina svar!

1.  +   $4 + 5 = 9$

2.  +   $4 + 3 = 7$

3.  +   $5 + 2 = 7$

4.  +   $1 + 4 = 5$

5.  +   $5 + 4 = 9$

6.  +   $4 + 2 = 6$