
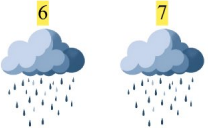




# Rolig Addition

Addera talen och skriv dina svar!

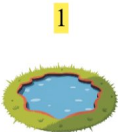
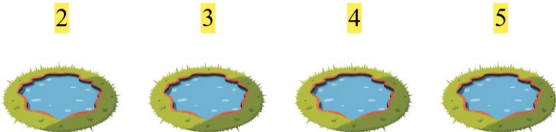
1.  +   $5 + 2 = 7$

2.  +   $4 + 1 = 5$

3.  +   $4 + 3 = 7$

4.  +   $3 + 2 = 5$

5.  +   $3 + 1 = 4$

6.  +   $1 + 4 = 5$