




# Rolig Addition

Räkna bilderna, lägg till talet och skriv ditt svar!


1.  + 5  $3 + 5 = 8$

2.  + 1  $4 + 1 = 5$

3.  + 3  $1 + 3 = 4$

4.  + 2  $3 + 2 = 5$

5.  + 4  $2 + 4 = 6$

6.  + 3  $5 + 3 = 8$