



Rolig Addition

Räkna bilderna, lägg till talet och skriv ditt svar!


1.  + 4 $4 + 4 = 8$

2.  + 3 $3 + 3 = 6$

3.  + 1 $4 + 1 = 5$

4.  + 3 $2 + 3 = 5$

5.  + 5 $1 + 5 = 6$

6.  + 1 $3 + 1 = 4$