

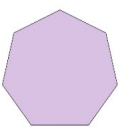
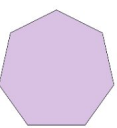
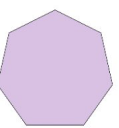
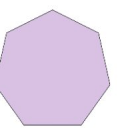
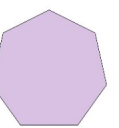


# Rolig Addition

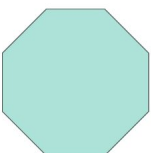
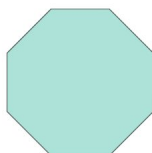
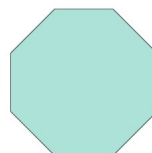


Hitta det saknade talet för att slutföra additionen!








1.  +  \_\_\_\_\_ =  5

2.   +  \_\_\_\_\_ =  5

3.  +  \_\_\_\_\_ =  6

4.      +  \_\_\_\_\_ =  7

5.    +  \_\_\_\_\_ =  7

6.      +  \_\_\_\_\_ =  8