


Hälften och hälften

Namn: _____ Datum: _____

★ Måla ena halvan av varje figur.


1

$$\frac{1}{2} \rightarrow$$




2

$$\frac{1}{2} \rightarrow$$



3

$$\frac{1}{2} \rightarrow$$



4

$$\frac{1}{2} \rightarrow$$

