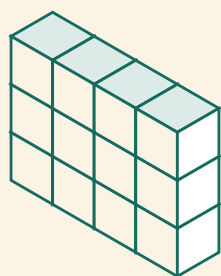


Kubtorn

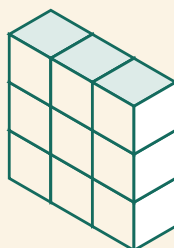
Namn: _____ Datum: _____

★ Räkna alla kuber i varje torn. Skriv summan.

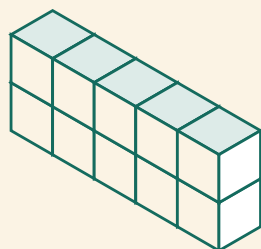
1



2



3



4

