

# Från addition till gånger

Namn: \_\_\_\_\_ Datum: \_\_\_\_\_


★ Räkna de lika grupperna. Gör klart multiplikationen.

1




$$2 \times 2 = \square$$

2




$$3 \times 3 = \square$$

3



$$4 \times 2 = \square$$

4



$$2 \times 2 = \square$$