


Dela lika

Namn: _____ Datum: _____


★ Dela högen lika i lådorna. Skriv hur många var och en får.

1



$$12 \div 3 = \square$$

2




$$9 \div 3 = \square$$

3



$$20 \div 4 = \square$$

4



$$16 \div 4 = \square$$