


Hur många grupper?

Namn: _____ Datum: _____

★ Ringarna gör lika grupper. Skriv hur många grupper det är.

1




$$12 \div 4 = \square$$

2




$$4 \div 2 = \square$$

3



$$8 \div 4 = \square$$

4



$$12 \div 4 = \square$$