



# Dela upp det

Namn: \_\_\_\_\_ Datum: \_\_\_\_\_


★ Dela högen lika i lådorna. Skriv hur många var och en får.

1




$$15 \div 3 = \square$$

2



$$9 \div 3 = \square$$

3



$$20 \div 4 = \square$$

4



$$16 \div 4 = \square$$