



Dela lika

Namn: _____ Datum: _____

★ Dela högen lika i lådorna. Skriv hur många var och en får.

1




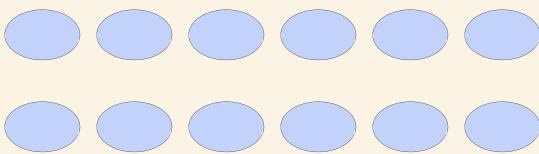
$$10 \div 2 = \square$$

2



$$20 \div 4 = \square$$

3



$$12 \div 3 = \square$$

4



$$4 \div 2 = \square$$