


# Gångfamiljer

Namn: \_\_\_\_\_ Datum: \_\_\_\_\_

★ Använd rutnätet för att göra klart alla fyra talen.

1




$2 \times 5 = \square$

$5 \times 2 = \square$

$10 \div 2 = \square$

$10 \div 5 = \square$

2




$5 \times 6 = \square$

$6 \times 5 = \square$

$30 \div 5 = \square$

$30 \div 6 = \square$

3



$3 \times 5 = \square$

$5 \times 3 = \square$

$15 \div 3 = \square$

$15 \div 5 = \square$

4



$4 \times 3 = \square$

$3 \times 4 = \square$

$12 \div 4 = \square$

$12 \div 3 = \square$