


Rader och kolumner

Namn: _____ Datum: _____




Räkna raderna och kolumnerna. Gör klart multiplikationen.

1



$4 \times 3 = \square$

2




$4 \times 6 = \square$

3



$3 \times 3 = \square$

4



$2 \times 5 = \square$