


Hur många grupper?

Namn: _____ Datum: _____

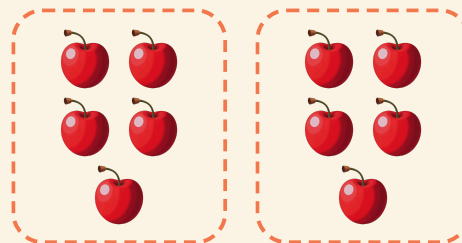
★ Ringarna gör lika grupper. Skriv hur många grupper det är.

1




$$20 \div 5 = \square$$

2




$$10 \div 5 = \square$$

3



$$12 \div 3 = \square$$

4



$$4 \div 2 = \square$$