

Dela upp det

Namn: _____ Datum: _____


★ Dela högen lika i lådorna. Skriv hur många var och en får.

1





$$20 \div 4 = \square$$

2





$$8 \div 4 = \square$$

3



$$12 \div 3 = \square$$

4



$$16 \div 4 = \square$$