


# Dominoräkning

Namn: \_\_\_\_\_ Datum: \_\_\_\_\_


★ Räkna båda sidor av dominobrickan. Skriv summan.

1



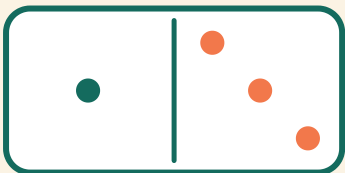
$$6 + 6 = \square$$

2




$$4 + 3 = \square$$

3



$$1 + 3 = \square$$

4



$$2 + 6 = \square$$