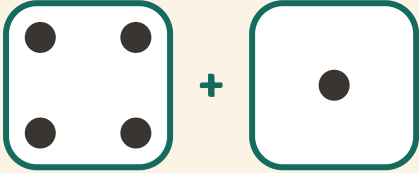


Slå och addera

Namn: _____ Datum: _____

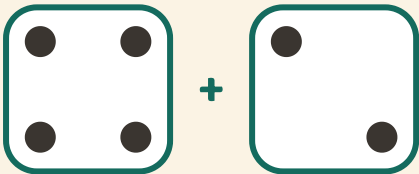
★ Räkna prickarna på båda tärningarna. Skriv summan.

1



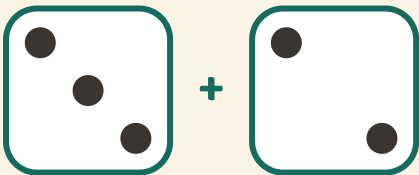
$$4 + 1 = \square$$

2



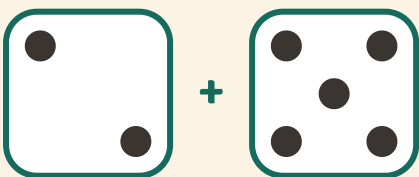
$$4 + 2 = \square$$

3



$$3 + 2 = \square$$

4



$$2 + 5 = \square$$