


# Räkna rutorna

Namn: \_\_\_\_\_ Datum: \_\_\_\_\_


★ Räkna rutorna i rektangeln. Gör klart multiplikationen.

1




$3 \times 5 = \square$

2




$4 \times 4 = \square$

3



$4 \times 5 = \square$

4



$3 \times 9 = \square$