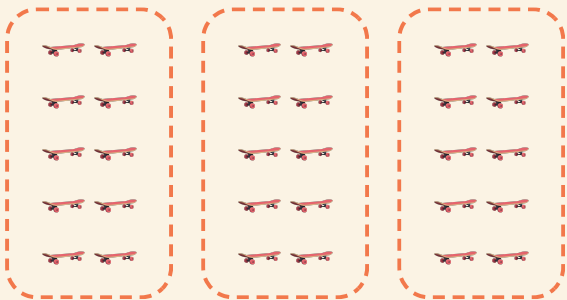


Enkla grupper

Namn: _____ Datum: _____


★ Räkna de lika grupperna. Gör klart multiplikationen.

1



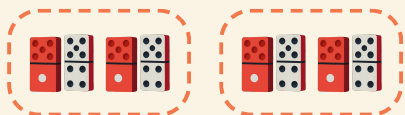
$$3 \times 10 = \square$$

2



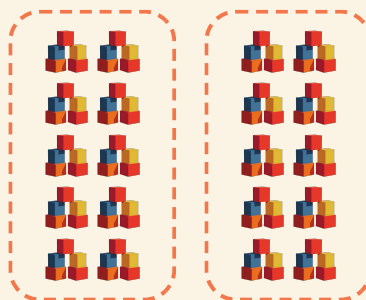
$$4 \times 2 = \square$$

3



$$2 \times 2 = \square$$

4



$$2 \times 10 = \square$$