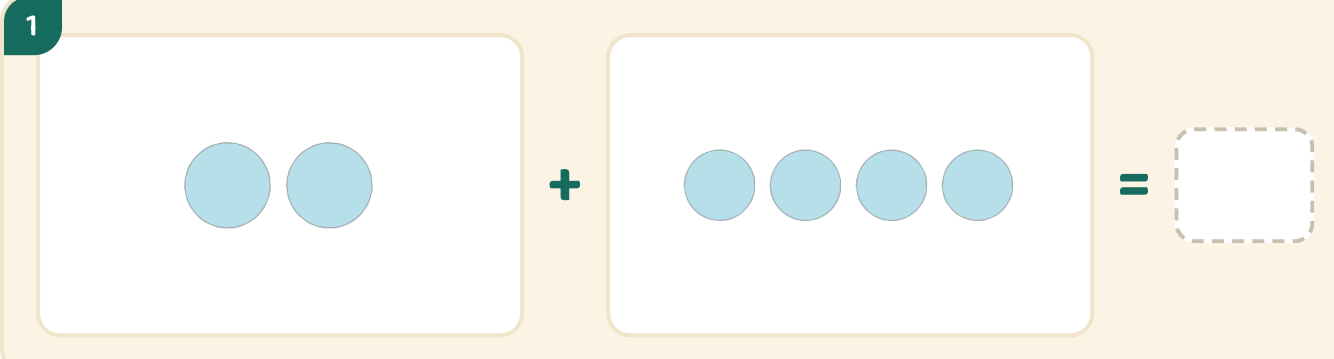


Bildaddition

Namn: _____ Datum: _____

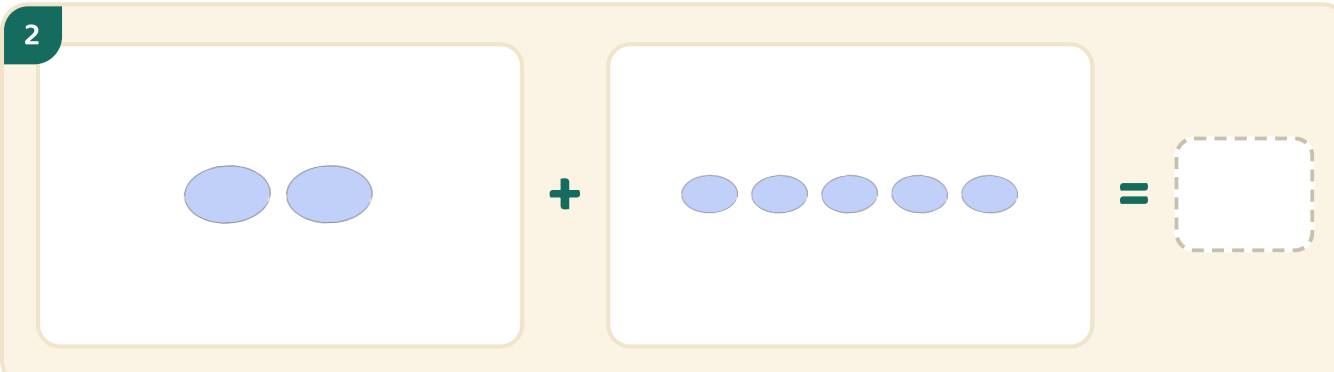
★ Räkna båda grupperna. Skriv hur många det är tillsammans.

1



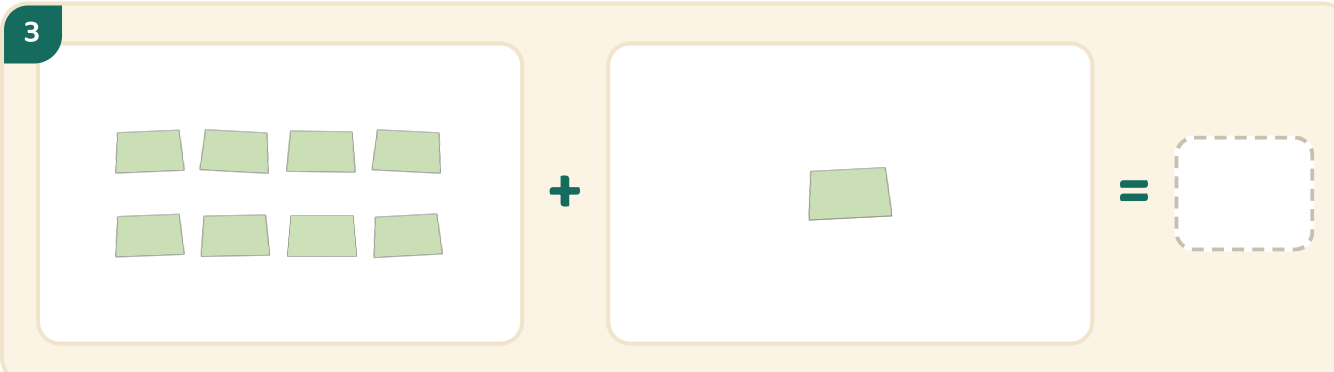
Two blue circles are shown in a white box on the left. A plus sign is in the middle. On the right, a white box contains four blue circles. To the right of this is an equals sign followed by a dashed rectangular box for the answer.

2



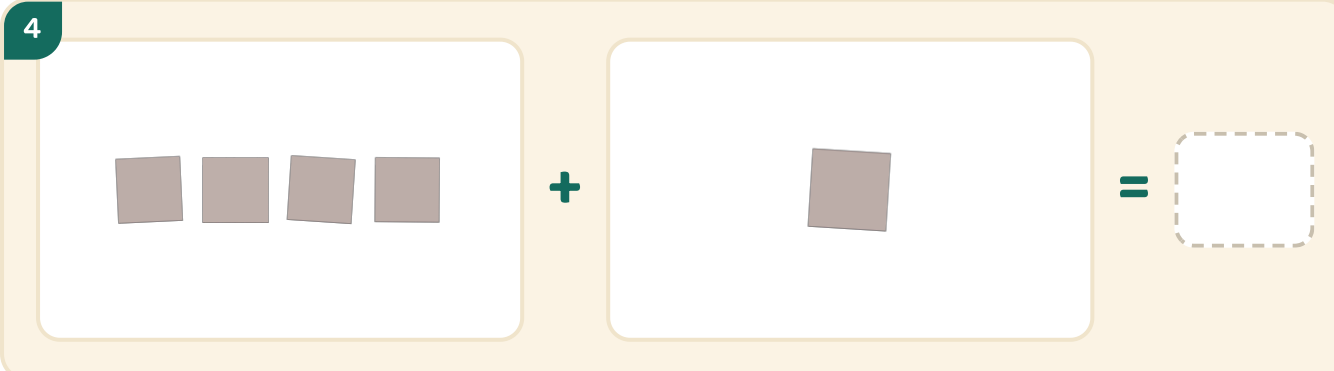
Two blue ovals are shown in a white box on the left. A plus sign is in the middle. On the right, a white box contains five blue ovals. To the right of this is an equals sign followed by a dashed rectangular box for the answer.

3



Eight green trapezoids are shown in a white box on the left, arranged in two rows of four. A plus sign is in the middle. On the right, a white box contains one green trapezoid. To the right of this is an equals sign followed by a dashed rectangular box for the answer.

4



Four brown squares are shown in a white box on the left. A plus sign is in the middle. On the right, a white box contains one brown square. To the right of this is an equals sign followed by a dashed rectangular box for the answer.