

# Skattjakt

Följ ledtrådarna och hitta skatten!


























Börja vid E5.

Flytta västerut 2 rutor.

Flytta västerut 2 rutor.

Flytta österut 3 rutor.

Flytta västerut 2 rutor Var är skatten?

|   | 1                                                                                   | 2                                                                                   | 3                                                                                   | 4                                                                                    | 5                                                                                     |
|---|-------------------------------------------------------------------------------------|-------------------------------------------------------------------------------------|-------------------------------------------------------------------------------------|--------------------------------------------------------------------------------------|---------------------------------------------------------------------------------------|
| A |   |  |   |   |   |
| B |  |  |  |  |  |
| C |  |  |  |  |  |
| D |  |  |  |  |  |
| E |  |  |  |  |  |