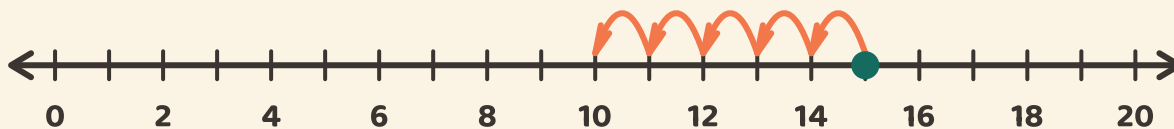


Hoppa bakåt, subtrahera

Namn: _____ Datum: _____

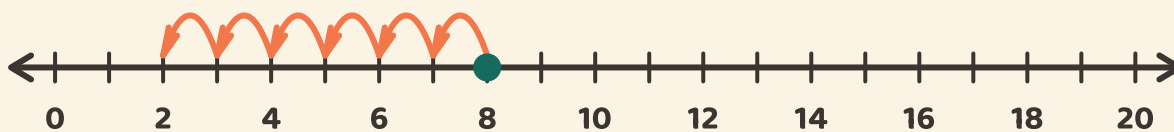
★ Följ hoppen bakåt. Skriv svaret på subtraktionen.

1



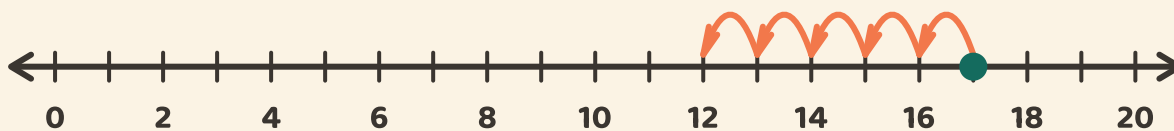
$$15 - 5 = \boxed{}$$

2



$$8 - 6 = \boxed{}$$

3



$$17 - 5 = \boxed{}$$