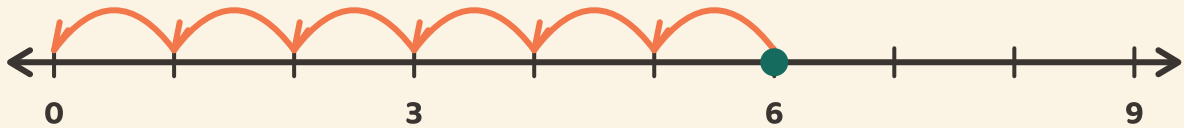


# Hoppa ner till noll

Namn: \_\_\_\_\_ Datum: \_\_\_\_\_

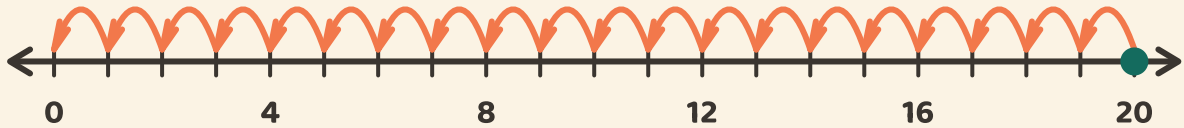
★ Räkna de lika hoppen tillbaka till noll. Skriv hur många hopp det tar.

1



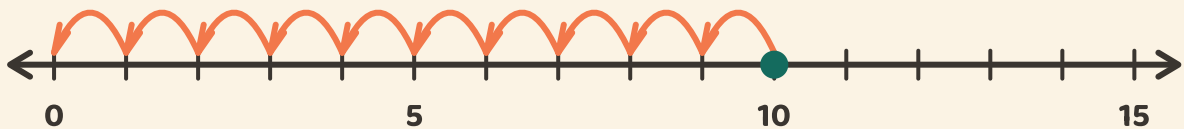
$$6 \div 3 = \square$$

2



$$20 \div 4 = \square$$

3



$$10 \div 5 = \square$$