


Gör 10

Namn: _____ Datum: _____



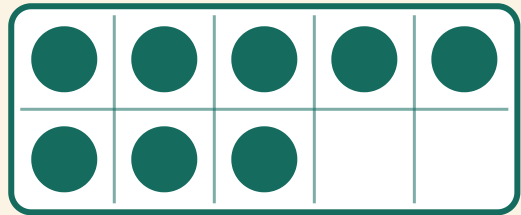
Hur många prickar till för att bli 10? Skriv talet som saknas.

1



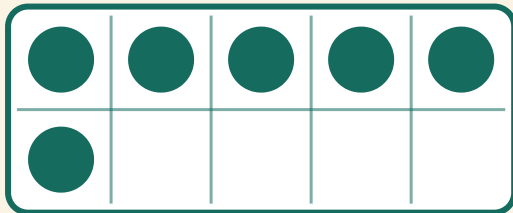
$$10 + \boxed{} = 10$$

2



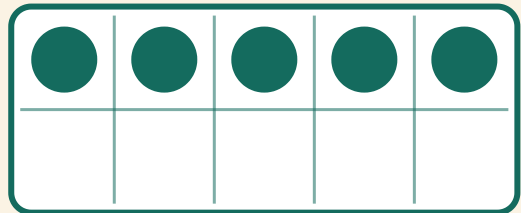
$$8 + \boxed{} = 10$$

3



$$6 + \boxed{} = 10$$

4



$$5 + \boxed{} = 10$$