


Hur många tiotal?

Namn: _____ Datum: _____


★ Räkna tiostavarna. Skriv talet som saknas.

1



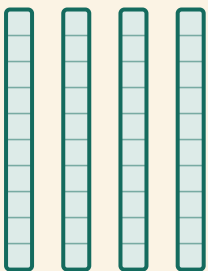
$$\square \times 10 = \square$$

2




$$\square \times 10 = \square$$

3



$$\square \times 10 = \square$$

4



$$\square \times 10 = \square$$